

Nom: _____

Date: _____

Systeme reproducteur

Nommes les différentes parties sexuelles.

Pénis

Testicules

Scrotum

Seins

Vagin

Vulve

Utérus

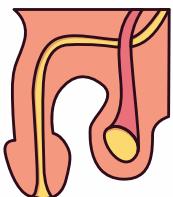
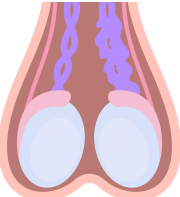
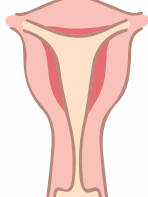
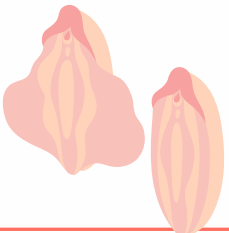
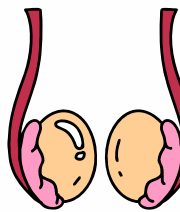


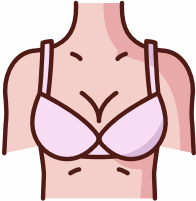
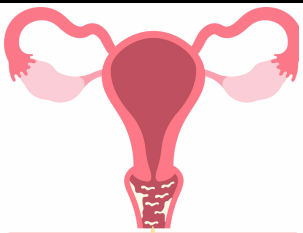
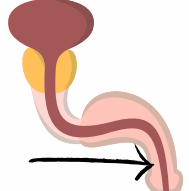
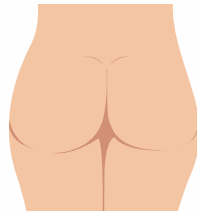

Vessie

Ovaire

Clitoris

Urètre

Fesses

 <input type="text"/>	 <input type="text"/>	 <input type="text"/>
 <input type="text"/>	 <input type="text"/>	 <input type="text"/>
 <input type="text"/>	 <input type="text"/>	 <input type="text"/>
 <input type="text"/>	 <input type="text"/>	 <input type="text"/>

Systeme reproducteur

Nommes les fonctions des différentes parties sexuelles

